




# Strawberry tarts.



Lucy had made strawberry tarts for a cake sale. She had put equal amounts of mixture in each tart tin and was trying to find the weight of the tarts.

Unfortunately she only had one 200 gram weight and one 125 gram weight.

She found the tart balanced on the scale with both weights and a quarter of a tart.

How heavy is each tart?

